



Name

Date



MENTAL MATHS SHEET 3:B3

1)	$142 - 10$	
2)	Half of 32	
3)	Multiply 7 by 3	
4)	Round 126 to the nearest 10	
5)	Double £1.24	
6)	How much money? 	
7)	$300 + \underline{\quad} = 391$	
8)	How many lines of symmetry? 	
9)	$12 - 6 + 8$	
10)	How much less than 2 metres is 180cm?	
11)	85 minutes = 1 hour _____ minutes	
12)	How many months in 3 years?	
13)	On a fishing trip, Flame caught 22 fish. Captain caught 27. How many more fish did Captain catch?	
14)	Tyger gets 7 out of 10 in a times tables test. What fraction is this?	
15)	Frazer gets paid 50p a day. How much does he get in a week?	
16)	Sally buys 3 pens for £12. How much did 1 pen cost?	



Free Math Sheets, Math Games and Math Help



MATH-SALAMANDERS.COM

Name

Date



MENTAL MATHS SHEET 3:B4

1)	$\underline{\quad} - 4 = 8$	
2)	How many mm in 12cm?	
3)	What fraction do I need to shade to make a whole? 	
4)	Increase 479 by 200	
5)	572p = £ _____	
6)	Half a kilometre = _____ m	
7)	How many sides does an octagon have?	
8)	Which is smallest? 8 inches 8 cm 8 m 8 yards 8 mm 8 feet	
9)	What is the time? 	
10)	800 subtract 6	
11)	A CD case holds 25 CDs. How many CDs can 3 cases hold?	
12)	Half of a number is 14. What is the number?	
13)	Maisie is 5 years younger than Kyle. Kyle is 2 years older than Sam. If Sam is 8 years old, how old is Maisie?	
14)	I have 375p. I spend £2. How much money do I have left?	£
15)	How many wheels do 6 tricycles have?	
16)	Frazer has 16 football cards which he places in piles of 4 cards. How many piles will he make?	



Free Math Sheets, Math Games and Math Help

MATH-SALAMANDERS.COM