

Summer Number Puzzles

I collect some shells on the beach.

I multiply the number of shells by 5.

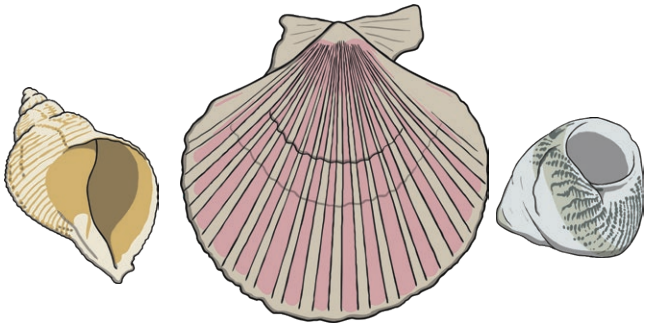
I then subtract 15,

multiply by 7,

and divide by 2.

I end with the number 735.

How many shells did I collect?



I decorate my sandcastle with flags.

I multiply the number of flags by 7.


I then add 78,

multiply by 4,

and divide by 3.

I end with the number 300.

How many flags did I use to decorate my sandcastle?



I practise cartwheels on the sand.

I multiply the number of cartwheels by 8.

I then subtract 132,

multiply by 10,

and divide by 4.

I end with the number 30.

How many cartwheels did I do?



Summer Number Puzzles

I collect some shells on the beach.

I multiply the number of shells I have by 7.

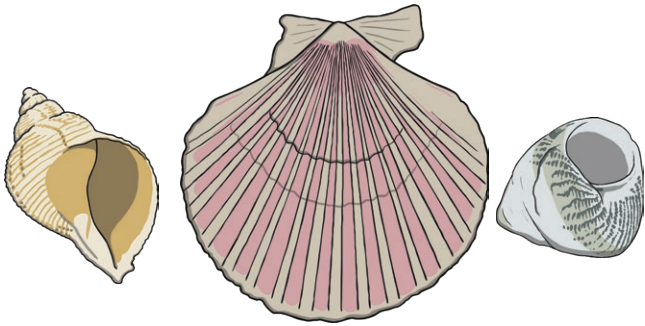
I then subtract 7,

multiply by 9,

and divide by 2.

I end with the number 1953.

How many shells did I collect?



I decorate my sandcastle with flags.

I multiply the number of flags I use by 26.


I then add 132,

multiply by 4,

and divide by 10.

I end with the number 344.

How many flags did I use to decorate my sandcastle?



I practise cartwheels on the sand.

I multiply the number of cartwheels I do by 38.


I then subtract 83,

multiply by 100,

and divide by 4.

I end with the number 19 775.

How many cartwheels did I do?



Summer Number Puzzles Answers

I collect some shells on the beach.
I multiply the number of shells by 5.
I then subtract 15,
multiply by 7,
and divide by 2.
I end with the number 735.
How many shells did I collect? **45 shells**

I collect some shells on the beach.
I multiply the number of shells I have by 7.
I then subtract 7,
multiply by 9,
and divide by 2.
I end with the number 1953.
How many shells did I collect? **63 shells**

I decorate my sandcastle with flags.
I multiply the number of flags by 7.
I then add 78,
multiply by 4,
and divide by 3.
I end with the number 300.
How many flags did I use to decorate my sandcastle? **21 flags**

I decorate my sandcastle with flags.
I multiply the number of flags I use by 26.
I then add 132,
multiply by 4,
and divide by 10.
I end with the number 344.
How many flags did I use to decorate my sandcastle? **28 flags**

I practise cartwheels on the sand.
I multiply the number of cartwheels by 8.
I then subtract 132,
multiply by 10,
and divide by 4.
I end with the number 30.
How many cartwheels did I do?
18 cartwheels

I practise cartwheels on the sand.
I multiply the number of cartwheels I do by 38.
I then subtract 83,
multiply by 100,
and divide by 4.
I end with the number 19 775.
How many cartwheels did I do?
23 cartwheels