
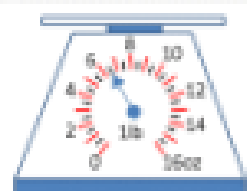


MENTAL MATHS SHEET 3:B1



1)	Round 86 to the nearest 10.	
2)	Half of 26.	
3)	$30 - 7$	
4)	Double 34.	
	How much more to make £1?	
5)		
6)	$10 + 11 + 12$	
7)	$400 + \underline{\quad} = 478$	
8)	What is 2 multiplied by 8?	
9)	50 subtract 46	
10)	How many lines of symmetry does a square have?	
11)	How many ounces? 	
12)	$5 \times 4 = 2 \times \underline{\quad}$	
13)	Subtract the number of sides in a triangle from the number of days in a week.	
14)	I have 8 FIVES. How much more do I need to make £1?	
15)	My journey to school takes 15 minutes. I arrive at 8:10. What time did I set off?	
16)	An apple costs 21p. How much do 3 apples cost?	





Free Math Sheets, Math Games and Math Help

MATH-SALAMANDERS.COM

MENTAL MATHS SHEET 3:B2



1)	$62 - 11$	
2)	$4 + 8 + 11$	
3)	$700 + \underline{\quad} = 782$	
4)	<p>What fraction is shaded?</p> 	
5)	The time is 4:30pm. What will the time be in an hour and a half?	
6)	Write down the number seven hundred and sixty.	
7)	Subtract the number of days in a week from the number of months in a year.	
8)	What is the next number: 36 39 42 45 48 <u> </u>	
9)	<p>How many lines of symmetry?</p> 	
10)	Frazer has 4 TENS. Sally has 25p. How much more does Frazer have?	
11)	Write down the time quarter past 3 in digital time.	
12)	12 children get into teams of 3. How many teams?	
13)	4 cars need new tyres fitting. How many tyres?	
14)	Tyler is 1m 6cm tall. Joe is 10cm shorter. How tall is Joe?	
15)	How many 50s make 200?	
16)	Which is longest? 6 inches 6 mm 6 feet 6 cm	

