

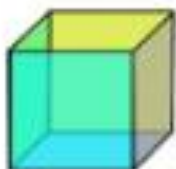
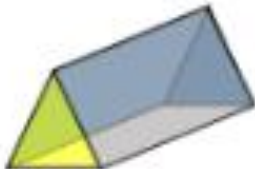






Name

Date



3D SHAPE PROPERTIES SHEET 5

Fill in the name, and number of faces, edges and vertices for each shape.

Name: Faces: Edges: Vertices: <div style="text-align: center; margin-top: 10px;">  </div>	Name: Faces: Edges: Vertices: <div style="text-align: center; margin-top: 10px;">  </div>
Name: Faces: Edges: Vertices: <div style="text-align: center; margin-top: 10px;">  </div>	Name: Faces: Edges: Vertices: <div style="text-align: center; margin-top: 10px;">  </div>
Name: Faces: Edges: Vertices: <div style="text-align: center; margin-top: 10px;">  </div>	Name: Faces: Edges: Vertices: <div style="text-align: center; margin-top: 10px;">  </div>
Name: Faces: Edges: Vertices: <div style="text-align: center; margin-top: 10px;">  </div>	Name: Faces: Edges: Vertices: <div style="text-align: center; margin-top: 10px;">  </div>



cylinder	square pyramid	triangular pyramid	cuboid
cube	sphere	triangular prism	cone



Free Math Sheets, Math Games and Math Help

MATH-SALAMANDERS.COM